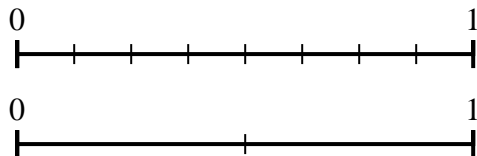




Use the number lines to answer the questions.

Answers

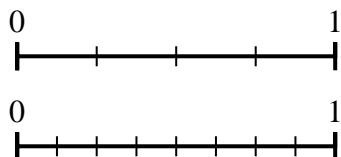
1) Using the number lines shown, what is the equivalent fraction to $\frac{8}{8}$?



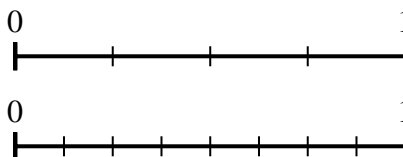
2) Using the number lines shown, what is the equivalent fraction to $\frac{2}{2}$?



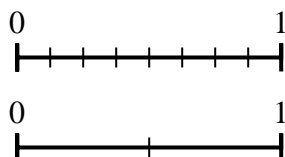
3) Using the number lines shown, what is the equivalent fraction to $\frac{2}{4}$?



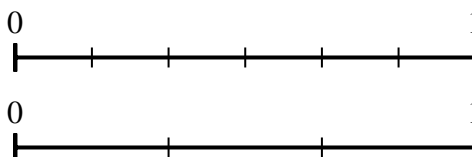
4) Using the number lines shown, what is the equivalent fraction to $\frac{4}{4}$?



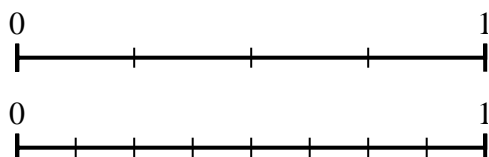
5) Using the number lines shown, what is the equivalent fraction to $\frac{4}{8}$?



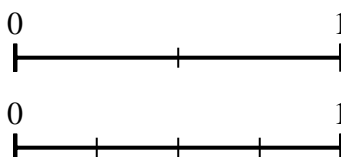
6) Using the number lines shown, what is the equivalent fraction to $\frac{4}{6}$?



7) Using the number lines shown, what is the equivalent fraction to $\frac{3}{4}$?



8) Using the number lines shown, what is the equivalent fraction to $\frac{1}{2}$?

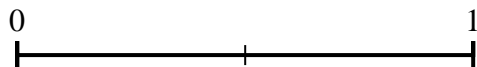
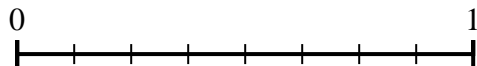


1. _____
2. _____
3. _____
4. _____
5. _____
6. _____
7. _____
8. _____

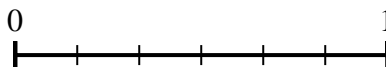
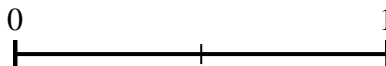


Use the number lines to answer the questions.

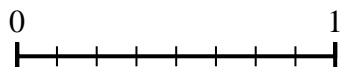
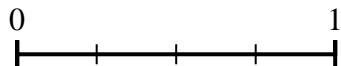
1) Using the number lines shown, what is the equivalent fraction to $\frac{8}{8}$?



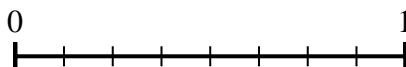
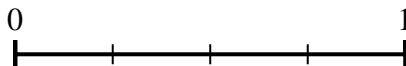
2) Using the number lines shown, what is the equivalent fraction to $\frac{2}{2}$?



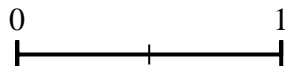
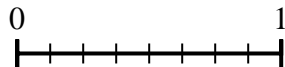
3) Using the number lines shown, what is the equivalent fraction to $\frac{2}{4}$?



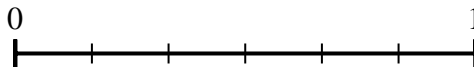
4) Using the number lines shown, what is the equivalent fraction to $\frac{4}{4}$?



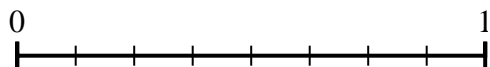
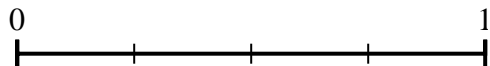
5) Using the number lines shown, what is the equivalent fraction to $\frac{4}{8}$?



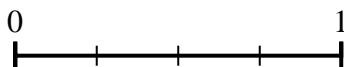
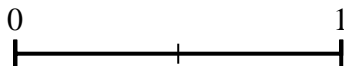
6) Using the number lines shown, what is the equivalent fraction to $\frac{4}{6}$?



7) Using the number lines shown, what is the equivalent fraction to $\frac{3}{4}$?



8) Using the number lines shown, what is the equivalent fraction to $\frac{1}{2}$?



Answers

1. $\frac{2}{2}$

2. $\frac{6}{6}$

3. $\frac{4}{8}$

4. $\frac{8}{8}$

5. $\frac{1}{2}$

6. $\frac{2}{3}$

7. $\frac{6}{8}$

8. $\frac{2}{4}$



Use the number lines to answer the questions.

1)

2)

3)

4)

5)

6)

7)

8)

Answers

1. _____

2. _____

3. _____

4. _____

5. _____

6. _____

7. _____

8. _____